

DAV PUBLIC SCHOOL, RAJAULI

SUMMER

VACATION

Homework



DAV PUBLIC SCHOOL, RAJAULI

ARYA SAMAJ MANDIR CAMPUS

SUMMER VACATION ASSIGNMENT & PROJECT 2025-26

SUBJECT: - ENGLISH

CLASS III & SEC: _____

NAME: _____

ROLL NO. _____

1. Read carefully the passage given below.

The hillside is quiet and beautiful. One can hear the sound of the birds chirping, the river flowing and the wind blowing. The mountains are brown in colour. But some mountains have white snow on the top. The bright yellow sun rises from between the mountains. The river flows down the mountain and is deep blue. The water also has many fish in them. These fish are both big and small. Most of the fish are red and green in colour. There are many houses on both sides of the river. Several people live in these houses. These people walk along the river and enjoy mother nature.

Now answer the following questions from the passage:

- i. What can you hear on the hillside?
- ii. Why are some mountains white on the top?
- iii. What do the people do?
- iv. What rises in between the mountain?

2. Add a noun to each of the following sentences.

(car ,carpet ,jungle ,kite ,ball ,baby ,Delhi, ice-cream ,Radha ,horse ,cricket ,Tina)

- i. Animal lives in the_____.
- ii. Malini goes to school by_____.
- iii. My sister _____is taller than me.
- iv. My friend likes _____.
- v. I like to play _____.
- vi. Boy is playing with bat and_____.
- vii. I have a red_____.

viii. _____ is in my class.

ix. Ram is going to _____.

DAV RAJAULI

- x. _____ runs fast.
- xi. The _____ is crying.
- xii. The _____ is flying in the sky.

3. Add a correct pronoun to each of the following sentences.

(They ,We ,Me ,She ,Them, I ,Her ,Him, Us ,He ,It ,You)

- i. _____ saw a blue whale.
- ii. _____ were playing football.
- iii. _____ likes to dance.
- iv. _____ like to read about dinosaur.
- v. _____ went to visit our grandparents.
- vi. He gave _____ an orange.
- vii. Give _____ a glass of water.
- viii. Tell _____ to work hard.
- ix. _____ is a nice painting.
- x. My uncle is coming to visit _____.
- xi. Are _____ all right?
- xii. I will play with _____.

4. Draw or paste a picture of dolphin.



DAV PUBLIC SCHOOL, RAJAULI

ARYA SAMAJ MANDIR CAMPUS

SUMMER VACATION ASSIGNMENT & PROJECT 2025-26

SUBJECT: - HINDI

CLASS III & SEC: _____

NAME: _____

ROLL NO. _____

निम्नलिखित प्रश्नों के उत्तर दीजिए -

1. 'ड़' तथा 'ढ़' से बनने वाले तीन - तीन शब्द लिखें--

'ड़' से बनने वाले शब्द - _____, _____, _____

'ढ़' से बनने वाले शब्द - _____, _____, _____

2. 'त' तथा 'स्म' संयुक्त व्यंजनों का प्रयोग कर तीन- तीन शब्द लिखिए ।

'त' वाले शब्द - _____, _____, _____

'स्म' वाले शब्द - _____, _____, _____

3. निम्नलिखित शब्दों में से संज्ञा, सर्वनाम तथा क्रिया को छाँटकर लिखें ।

रामायण, वह, लिखना, मीठा, भारत, मैं, तुम, ताजमहल, खाना, खेलना, आप, नाचना

संज्ञा शब्द - _____

सर्वनाम शब्द - _____

क्रिया शब्द - _____

1. दिए गए शब्दों का पुल्लिङ्ग रूप लिखें ।

लड़का - _____

लेखक - _____

घोड़ा - _____

मालिक - _____

नौकर - _____

2. दिए गए शब्दों का वचन रूप बदल कर लिखें ।

मूर्तियाँ _____

तितली - _____

वस्तुएँ- _____

कलम- _____

जूता- _____

3. संज्ञा वृक्ष बनाएँ।

अथवा

रक्षाबंधन से संबंधित किन्हीं दो वस्तुओं का चित्र बनाएँ।



DAV PUBLIC SCHOOL, RAJAULI

ARYA SAMAJ MANDIR CAMPUS

SUMMER VACATION ASSIGNMENT & PROJECT 2025-26

SUBJECT: - MATHS

CLASS III & SEC: _____

NAME: _____

ROLL NO. _____

1. Fill in the blanks :-

- a) The smallest number using the digits 0, 6, 3 and 2 _____.
- b) $9000 + 30 + 2 =$ _____.
- c) Zero added to any number is equal to the _____.
- d) The result (answer) of subtraction is called _____.
- e) The numbers which are added are called _____.

2. Complete the pattern :-

- a) 1296, _____, 1496, _____, _____, 1796, _____.
- b) 81, 72, _____, 54, 45, _____, _____, 18, _____.
- c) 20, _____, 80, _____, 120, _____, 180, 200.

3. Put the correct sign (> , < or =)

- a) $49 + 10$ _____ 59 .
- b) $100 - 10$ _____ 110 .
- c) 4204 _____ $4000 + 200 + 10 + 4$.
- d) 2080 _____ 2008 .
- e) 40×5 _____ 20×10 .

4. Solve the puzzle :-

- a) I am a four digit number. All my digits are same. Sum of four digits is 32. Who am I? _____.
- b) In a 4 digit number, the place value of 5 is 50, the place value of 8 is 8000 and ones place is 6. What is the number? _____.
- c) I am not a multiple of 10. My tens digit is a multiple of 3. I am the predecessor of smallest 3- digit number. I have 2 – repeated digit. Who am I? _____.

5. Find these numbers in the given chart. Colour them using pencil colours or crayons.

Pink	Yellow	Green
Three thousand Six	$7000+80+5$	Successor of 499
Place value of 2 in 5298	Five thousand two hundred forty six	$9000+200+6$
Predecessor of 5050	$4000+5$	3098
$1000+200+70+7$	Successor of 2099	Greatest 2- digit number
4050	Nine thousand ninety	Predecessor of 10

CHART

7085	9206	5049
9090	9	Three thousand ninety eight

5246	Four thousand fifty	99
500	3006	200
1277	4005	2100

DAV RAJAULI

❖ **PROJECT:-**

- I. Represent the place values of the bold digits on an abacus and write the number names for the given numerals. Use ice-cream sticks on a scrapbook to visually illustrate the place values.

a) 4 5 2 **9**

b) 6 **0** 9 1

c) **9** 9 5 2

d) 1 **8** 3 0

- II. Design a colorful flower with petals that show the sum of four-digit numbers, similar to the example in the figure.

Note: Complete the project work in scrapbook.





DAV PUBLIC SCHOOL, RAJAULI

ARYA SAMAJ MANDIR CAMPUS

SUMMER VACATION ASSIGNMENT & PROJECT 2025-26

SUBJECT: - SCIENCE

CLASS III & SEC: _____

NAME: _____

ROLL NO. _____

A. Multiple choice questions-

1. The sense organ which helps us to express our feeling is

- a) ears b) eyes c) nose d) tongue

2. The sense organ which helps us to protect our body part is

- a) skin b) eyes c) nose d) ears

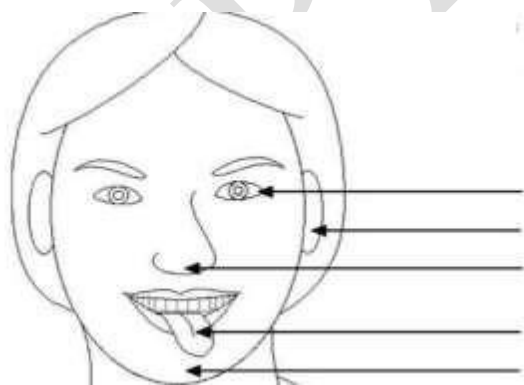
3. The category of plant that is thin and cannot stand straight is

- a) shrubs b) climber c) herbs d) trees

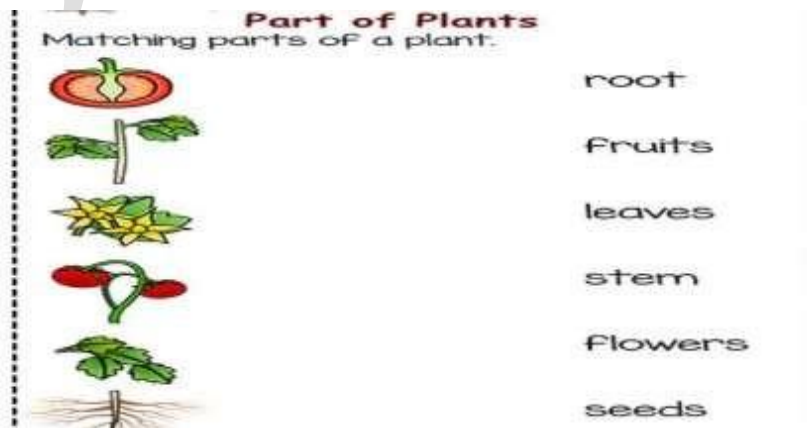
4. The part of a plant that makes food is

- a) root b) leaf c) flower d) fruit

B. Label all the sense organs in given picture and colour it.



C.



D. Observe the picture given below and answer the following questions.



a) What are the boys doing in the picture?

Ans:- _____

b) What are the girls doing in the picture?

Ans:- _____

c) What message do you get seeing the children in the picture?

Ans:- _____

E. Competency based questions

1. Write two ways in which we can take care of our sense organs.

Ans: _____

2. The doctor gives us advice to not to put any object in our ears. Why?

Ans: _____

Observational Activities

Take an empty bottle / unused plastic box or scrap utensil and plant a sapling in it. Name your plant and take a very good care of it. Observe the growth of the plant.



DAV PUBLIC SCHOOL, RAJAULI

ARYA SAMAJ MANDIR CAMPUS

SUMMER VACATION ASSIGNMENT & PROJECT 2025-26

SUBJECT: - S.ST.

CLASS III & SEC: _____

NAME: _____

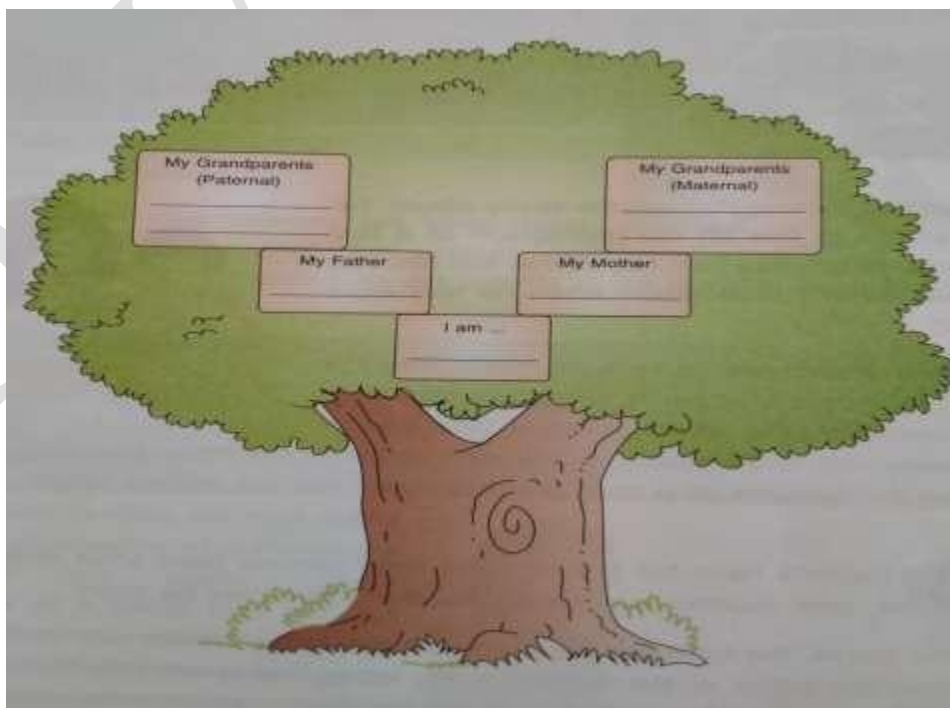
ROLL NO. _____

1. Identify the picture and write few lines about them.



Project:-

- 1.) On a political map of India write the name of states and its capital. (Colour it).
- 2.) Complete your family tree by filling the names.





DAV PUBLIC SCHOOL, RAJAULI

ARYA SAMAJ MANDIR CAMPUS

SUMMER VACATION ASSIGNMENT & PROJECT 2025-26

SUBJECT: - G.K.

CLASS III & SEC: _____

NAME: _____

ROLL NO. _____

1. What is the capital city of India?

2. Which is the largest continent in the world?

3. Name two countries that border India.

4. What is the largest ocean in the world?

5. Which is the hottest planet in our solar system?

6. What process do plants use to make their own food?

7. What gas do trees release that humans need to breathe?

8. What is the smallest bird in the world?

9. Which planet is known as the "Red Planet"?

10. What is the largest planet in our solar system?



DAV PUBLIC SCHOOL, RAJAULI

ARYA SAMAJ MANDIR CAMPUS

SUMMER VACATION ASSIGNMENT & PROJECT 2025-26

SUBJECT: - COMPUTER

CLASS III & SEC: _____

NAME: _____

ROLL NO. _____

Q1. Enjoy the video at the link given below:-

<https://youtu.be/RxDjlmMHM5g>

Q2. Draw the parts of computer in notebook. (hint- Keyboard, Mouse, Scanner, Monitor)

Q3. Learn the uses of computers given on Page- 20 in book. Complete the pending work done so far.

Revise the chapter-1 book work and notebook work.

Emphasize on the difficult words and learn their spelling

DAV RAJAULI

